















## COUNTING WITH CARS PART 1






Using your maths skills count the cars from the collection and put the right answer in the box.  
Answer sheet on the back, don't peek!




1.  +  =





2.  +  +  =







3.  +  +  +  =


4.  +  +  +  +  =

5.  +  +  -  -  =

6.  x  =  +

7.  x  =  +  +

8.  +  +  +  ÷  +  =



HOW DID YOU GET ON? Show us your fantastic maths skills

#HaynesAtHome #MuseumFromHome



NO PEEKING NOW!

Qu 1. 2

Qu 2. 3

Qu 3. 4

Qu 4. 5

Qu 5. 1

Qu 6. 2

Qu 7. 4

Qu 8. 2